

4 times table

Name: _____

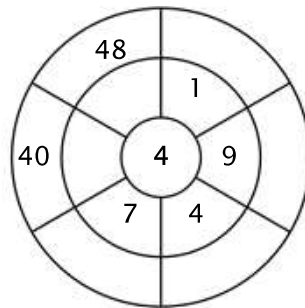
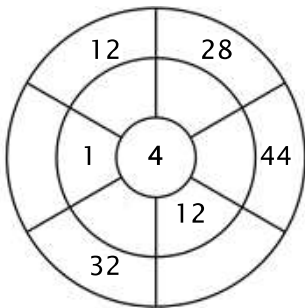
Exercise 1:

Color in all of the boxes that are the solutions of this time table.

22	17	2	16	23
24	16	5	32	34
24	20	44	48	12
28	6	28	4	37
3	40	36	44	36

Exercise 2:

Complete the circle by multiplying the number in the center by the middle ring to get the outer numbers.



Exercise 3:

Fill in the correct product.

a) $4 \times 1 = \underline{\quad}$

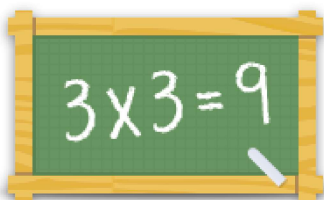
b) $4 \times 5 = \underline{\quad}$

c) $4 \times 3 = \underline{\quad}$

d) $4 \times 11 = \underline{\quad}$

e) $4 \times 10 = \underline{\quad}$

f) $4 \times 2 = \underline{\quad}$



For more worksheets, games and exercises:
www.timestables.com